













































Fill in the missing number.

0, 1, 2, 3, 4, _____	_____, 4, 3, 2, 1, 0
0, 1, 2, 3, _____, 5	5, _____, 3, 2, 1, 0
0, 1, 2, _____, 4, 5	5, 4, _____, 2, 1, 0
0, 1, _____, 3, 4, 5	5, 4, 3, _____, 1, 0
0, _____, 2, 3, 4, 5	5, 4, 3, 2, _____, 0
_____, 1, 2, 3, 4, 5	5, 4, 3, 2, 1, _____
0, _____, 2, 3, 4, 5	0, 1, 2, 3, _____, 5
0, 1, _____, 3, 4, 5	5, 4, _____, 2, 1, 0
0, 1, 2, _____, 4, 5	0, 1, _____, 3, 4, 5
0, 1, 2, 3, _____, 5	_____, 1, 2, 3, 4, 5






























Circle the number needed to make 5.

1		 
2	* * * *	* * *
3		 
4		  
5	* * *	* * * * *
6		  
7		  
8	*	* * * * *
9		  
10	1	3 4 2




























Circle the number to make 6.

1				
2	* * * * *	*	* * *	
3				
4				
5	* * *	* *	* * *	*
6				
7	* *	* *	* * *	* * * *
8				
9				
10	1	3	2	5

Circle the number to make 7.

1				
2				
3	* * * * *	* *	* * *	
4				
5				
6	* * *	* * *	* * * *	* *
7				
8				
9	* *	* *	* * * * *	* * * *
10	2	2	5	4
11				
12				
13	1	2	6	5

Circle the number to make 8.

1				
2		 		
3				
4	* * * * *	* * * * *		
5		  		
6		  		
7	* * * * *	* * * * * * * * * * * * * *		
8		  		
9		  		
10	* *	* * * * * * * * * * * * * *		
11	2	6	4	3
12		  		
13	1	7	6	5

Circle the number to make 5.

1				
2	* * * *	* * *	*	
3				
4	4	1	4	
5				
6	* * *	* *	* * * *	*
7				
8	3	3	1	2
9				
10	* *	* * * *	* * *	* *
11	2	2	3	1
12	*	* * * * *	* * *	* * * *
13	1	4	5	3
14				
15	5	2	1	0

Complete the number bond.

Complete the number bond.

Name _____

Date _____

My Addition Practice



$1 + 1 =$ <input type="text"/>	$2 + 3 =$ <input type="text"/>
$4 + 1 =$ <input type="text"/>	$1 + 3 =$ <input type="text"/>
$1 + 2 =$ <input type="text"/>	$2 + 2 =$ <input type="text"/>
$3 + 1 =$ <input type="text"/>	$3 + 1 =$ <input type="text"/>
$1 + 4 =$ <input type="text"/>	$2 + 3 =$ <input type="text"/>
$2 + 1 =$ <input type="text"/>	$4 + 1 =$ <input type="text"/>
$2 + 2 =$ <input type="text"/>	$3 + 2 =$ <input type="text"/>
$3 + 2 =$ <input type="text"/>	$1 + 3 =$ <input type="text"/>

Name _____

Date _____

My Decomposition Practice



$1 + 1 = \square$	$2 = \square + \square$
$\square = 4 + 1$	$3 = \square + \square$
$1 + 2 = \square$	$2 + 2 = \square$
$3 + 2 = \square$	$\square = 3 + 1$
$\square = 1 + 3$	$3 = \square + \square$
$2 + 1 = \square$	$3 + 2 = \square$
$1 + 4 = \square$	$4 = \square + \square$
$\square = 3 + 2$	$4 = \square + \square$

Name _____

Date _____

My Subtraction Practice



$5 - 1 = \square$	$5 - 4 = \square$
$4 - 1 = \square$	$5 - 3 = \square$
$3 - 1 = \square$	$5 - 2 = \square$
$2 - 1 = \square$	$3 - 1 = \square$
$5 - 2 = \square$	$2 - 1 = \square$
$3 - 2 = \square$	$3 - 2 = \square$
$4 - 3 = \square$	$4 - 2 = \square$
$4 - 2 = \square$	$4 - 1 = \square$

Name _____

Date _____

My Subtraction Practice



$5 - 1 = \square$	$5 - 4 = \square$
$\square = 4 - 1$	$5 - 3 = \square$
$3 - 1 = \square$	$5 - 2 = \square$
$2 - 1 = \square$	$\square = 3 - 1$
$\square = 5 - 2$	$\square = 2 - 1$
$3 - 2 = \square$	$3 - 2 = \square$
$4 - 3 = \square$	$4 - 2 = \square$
$\square = 4 - 2$	$4 - 1 = \square$

Name _____

Date _____

My Mixed Practice to 5



$1 + 1 = \square$	$5 - 4 = \square$
$\square = 2 - 1$	$\square = 2 + 3$
$3 + 1 = \square$	$5 - 2 = \square$
$4 - 1 = \square$	$\square = 3 - 1$
$\square = 1 + 3$	$\square = 2 + 1$
$3 + 2 = \square$	$1 + 2 = \square$
$5 - 3 = \square$	$2 + 2 = \square$
$\square = 4 + 1$	$4 - 2 = \square$

Name _____

Date _____

Write the missing number.

Number correct: 

1	$2 + 1 = \square$	11	$\square = 3 + 2$
2	$1 + 1 = \square$	12	$1 + 3 = \square$
3	$1 + 4 = \square$	13	$\square = 2 + 2$
4	$3 + 1 = \square$	14	$\square = 1 + 2$
5	$2 + 2 = \square$	15	$1 + 4 = \square$
6	$2 + 3 = \square$	16	$\square = 2 + 3$
7	$1 + 2 = \square$	17	$\square = 5 + 1$
8	$4 + 1 = \square$	18	$5 + 2 = \square$
9	$3 + 2 = \square$	19	$1 + 0 = \square$
10	$1 + 3 = \square$	20	$5 + 0 = \square$

Name _____

Date _____

Write the missing number.

Number correct: 

1	$2 - 1 = \square$	11	$\square = 4 - 2$
2	$4 - 1 = \square$	12	$5 - 3 = \square$
3	$5 - 1 = \square$	13	$\square = 3 - 1$
4	$3 - 1 = \square$	14	$\square = 5 - 2$
5	$3 - 2 = \square$	15	$4 - 1 = \square$
6	$4 - 2 = \square$	16	$\square = 5 - 4$
7	$5 - 3 = \square$	17	$\square = 5 - 1$
8	$5 - 2 = \square$	18	$6 - 1 = \square$
9	$4 - 3 = \square$	19	$1 - 0 = \square$
10	$5 - 4 = \square$	20	$5 - 5 = \square$

Name _____

Date _____

Write the missing number.

Number correct: 

1	$2 + 1 = \square$	11	$3 + 2 = \square$
2	$2 - 1 = \square$	12	$3 - 2 = \square$
3	$3 + 1 = \square$	13	$4 + 0 = \square$
4	$3 - 1 = \square$	14	$4 - 0 = \square$
5	$4 + 1 = \square$	15	$5 + 0 = \square$
6	$4 - 1 = \square$	16	$5 - 0 = \square$
7	$1 + 1 = \square$	17	$5 - 5 = \square$
8	$1 - 1 = \square$	18	$4 + 1 = \square$
9	$2 + 2 = \square$	19	$5 - 4 = \square$
10	$2 - 2 = \square$	20	$5 - 1 = \square$

Name _____





Date _____









Write the missing number.


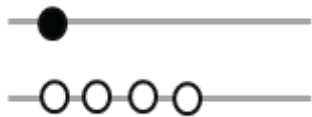

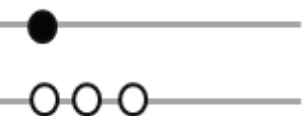

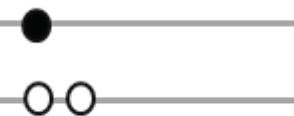


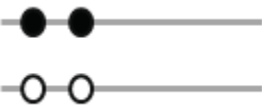

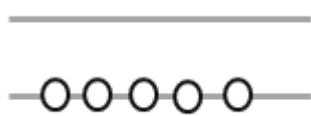

Number correct: 

1	$2 + 1 = \square$	11	$\square = 1 + 2$
2	$4 + 1 = \square$	12	$5 + 0 = \square$
3	$5 - 1 = \square$	13	$\square = 3 - 1$
4	$3 + 1 = \square$	14	$\square = 2 + 2$
5	$3 + 2 = \square$	15	$4 - 1 = \square$
6	$4 - 2 = \square$	16	$\square = 5 - 4$
7	$5 - 3 = \square$	17	$\square = 5 - 1$
8	$5 - 2 = \square$	18	$3 + 0 = \square$
9	$2 + 3 = \square$	19	$1 - 0 = \square$
10	$5 - 4 = \square$	20	$5 - 5 = \square$


Count and write the number.

 <p>1 2 3</p>	 <p>1 2 3</p>
 <p>1 2 3</p>	 <p>1 2 3</p>
 <p>1 2 3</p>	 <p>1 2 3</p>
 <p>1 2 3</p>	 <p>1 2 3</p>

 <p>1 2 3 4 5</p>	 <p>1 2 3 4 5</p>
 <p>1 2 3 4 5</p>	 <p>1 2 3 4 5</p>
 <p>1 2 3 4 5</p>	 <p>1 2 3 4 5</p>
 <p>1 2 3 4 5</p>	 <p>1 2 3 4 5</p>

 <p>1 2 3 4 5</p>	 <p>1 2 3 4 5</p>
 <p>1 2 3 4 5</p>	 <p>1 2 3 4 5</p>
 <p>1 2 3 4 5</p>	 <p>1 2 3 4 5</p>
 <p>1 2 3 4 5</p>	 <p>1 2 3 4 5</p>
 <p>1 2 3 4 5</p>	 <p>1 2 3 4 5</p>
 <p>1 2 3 4 5</p>	 <p>1 2 3 4 5</p>

Number correct:



Name _____

Date _____

Write the number of dots needed to make 10 dots.

1		9	
2		10	
3		11	
4		12	
5		13	
6		14	
7		15	
8		16	